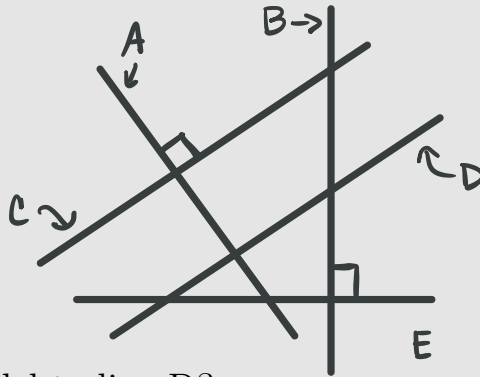


Topics to review:

- Parallel and perpendicular lines

Problem

Refer to the diagram to answer both questions.



Which line is parallel to line D?

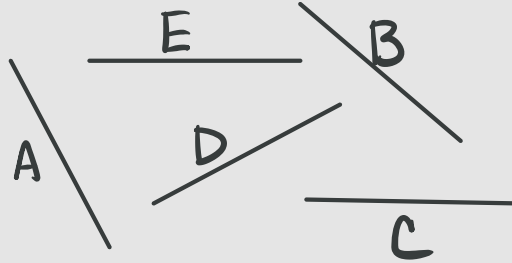
- (A) Line A
- (B) Line B
- (C) Line C
- (D) Line E

Which line is perpendicular to line D?

- (A) Line A
- (B) Line B
- (C) Line C
- (D) Line E

Problem 2

Refer to the diagram to answer both questions. Note that the end points of a line can be extended infinitely in opposite directions.



Which line is perpendicular to line A?

- (A) Line B
- (B) Line C
- (C) Line D
- (D) Line E

Which line is parallel to line C?

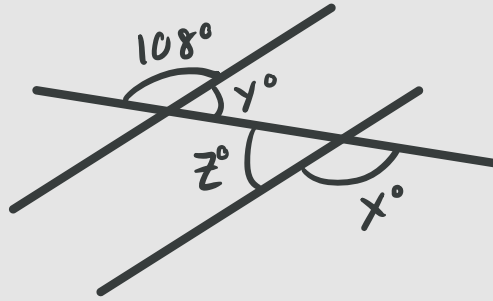
- (A) Line A
- (B) Line B
- (C) Line D
- (D) Line E

Topics to review:

- Angles, parallel lines, and transversals
- Missing angles with a transversal

Problem

Refer to the diagram to answer all 3 questions.



What is the measure of angle x ?

- (A) 180°
- (B) 90°
- (C) 108°
- (D) 72°

What is the measure of angle y ?

- (A) 180°
- (B) 90°
- (C) 108°
- (D) 72°

What is the measure of angle z ?

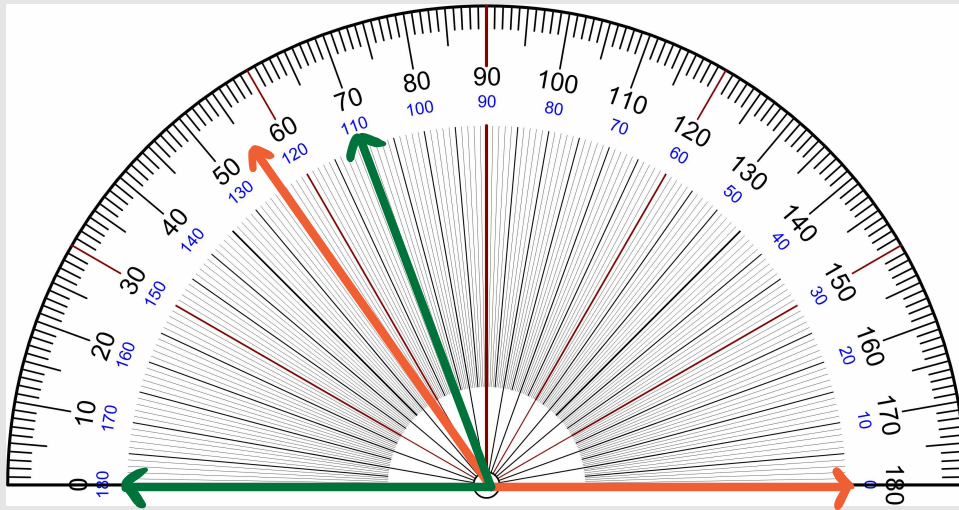
- (A) 180°
- (B) 90°
- (C) 108°
- (D) 72°

Topics to review:

- Using a protractor to measure angles

Problem

Refer to the image when answering the questions.



What is the measure of the **orange angle**?

- (A) 55°
- (B) 145°
- (C) 65°
- (D) 125°

What is the measure of the **green angle**?

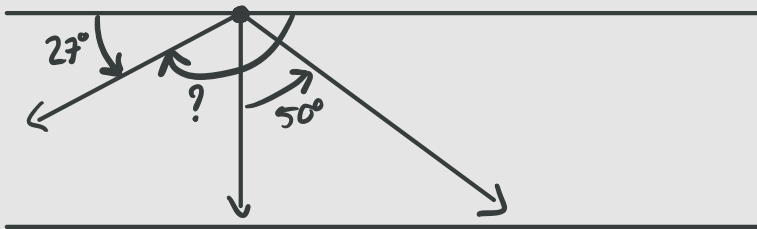
- (A) 180°
- (B) 70°
- (C) 95°
- (D) 110°

Topics to review:

- Solving for unknown angles

Problem

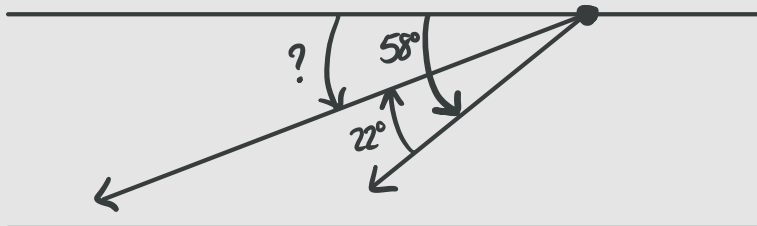
Refer to the diagram to answer question (1).



What is the measure of the unknown angle?

- (A) 177°
- (B) 66°
- (C) 95°
- (D) 153°

Refer to the diagram to answer question (2).



What is the measure of the unknown angle?

- (A) 100°
- (B) 22°
- (C) 45°
- (D) 36°